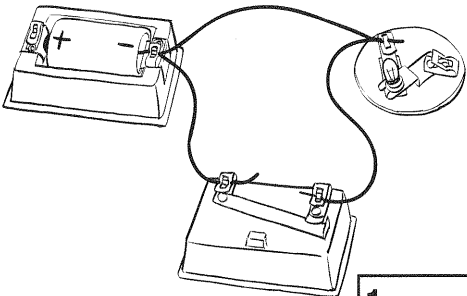
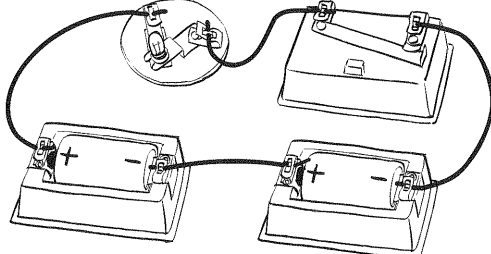
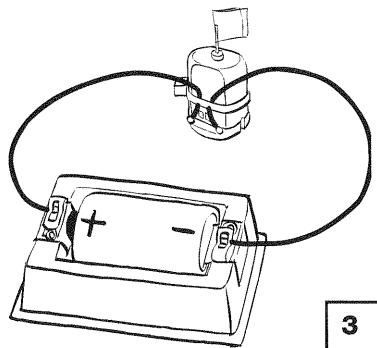
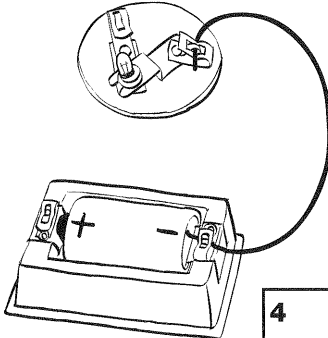
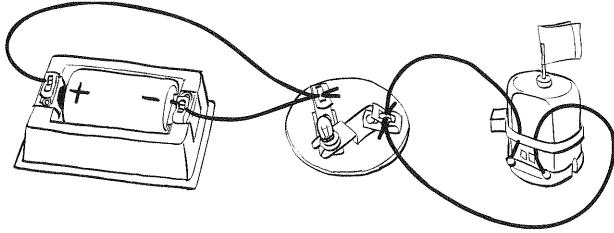
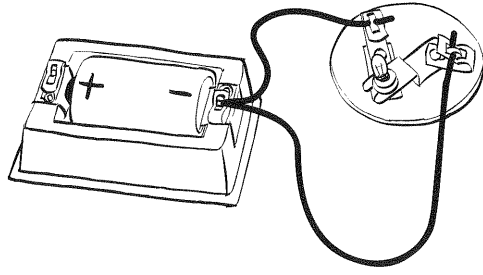


# BULBS AND MOTORS

Look at the pictures below. If the bulb will light or the motor will run, write "yes" in the box below the circuit. Write "no" if the bulb will not light or the motor will not run.

 <p style="text-align: right; margin-right: 20px;"><b>1</b> <input style="width: 100px; height: 20px;" type="text"/></p>	 <p style="text-align: right; margin-right: 20px;"><b>2</b> <input style="width: 100px; height: 20px;" type="text"/></p>
 <p style="text-align: right; margin-right: 20px;"><b>3</b> <input style="width: 100px; height: 20px;" type="text"/></p>	 <p style="text-align: right; margin-right: 20px;"><b>4</b> <input style="width: 100px; height: 20px;" type="text"/></p>
 <p style="text-align: right; margin-right: 20px;"><b>5</b> <input style="width: 100px; height: 20px;" type="text"/></p>	 <p style="text-align: right; margin-right: 20px;"><b>6</b> <input style="width: 100px; height: 20px;" type="text"/></p>

Choose one of the circuits above that will NOT work. Explain what you would do to fix it.

---



---



---



---